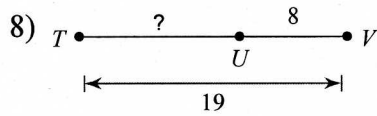
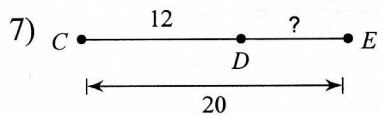
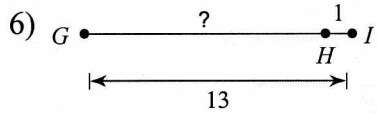
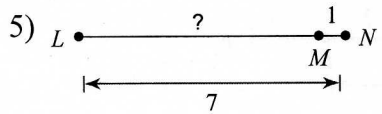
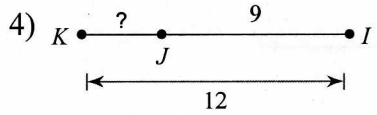
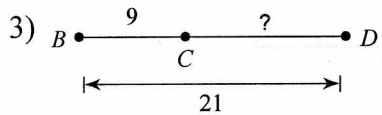
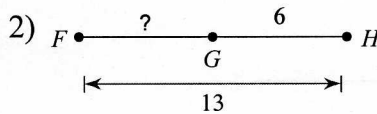

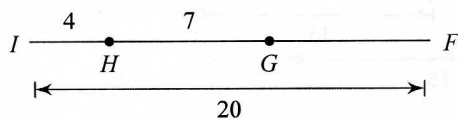


6-1 Segment Addition Postulate (ver1)_hw

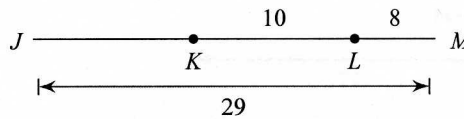
Find the length indicated.



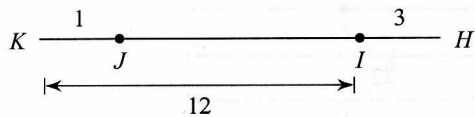
9) Find GF



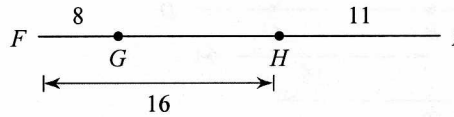
10) Find JK



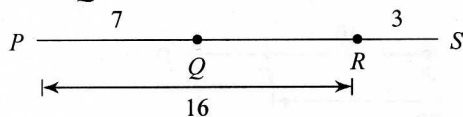
11) Find JH



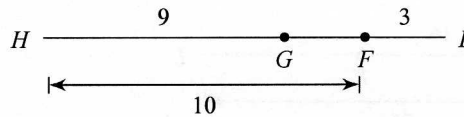
12) Find GI



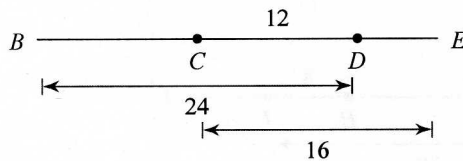
13) Find QS



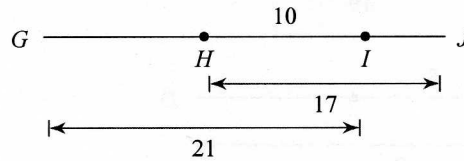
14) Find GE



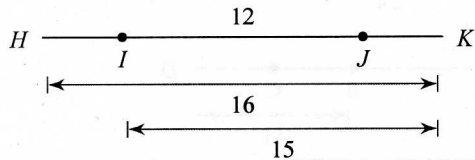
15) Find BE



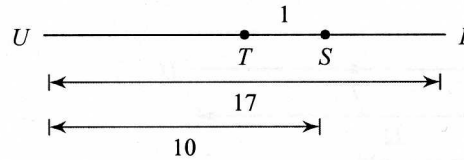
16) Find GJ



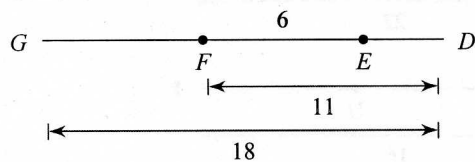
17) Find HJ



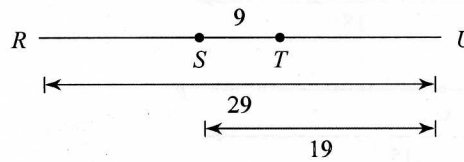
18) Find TR



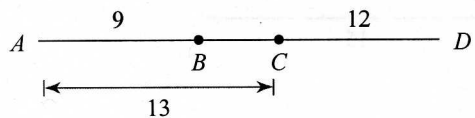
19) Find GE



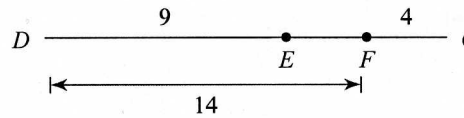
20) Find RT



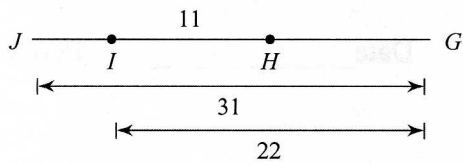
21) Find BD



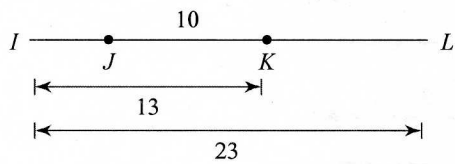
22) Find EG



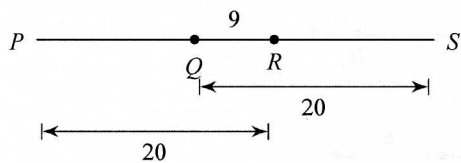
23) Find JH



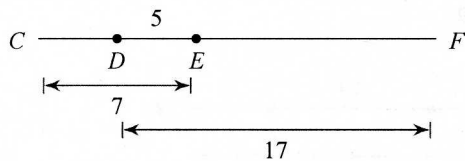
25) Find JL



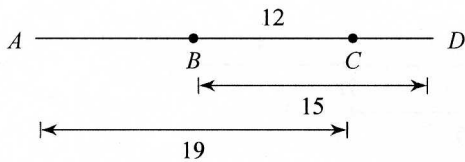
27) Find PS



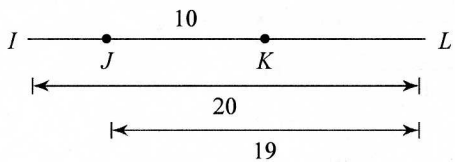
29) Find CF



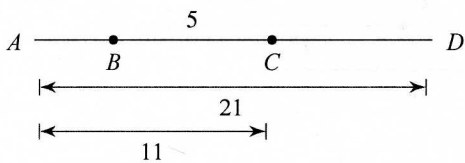
31) Find AD



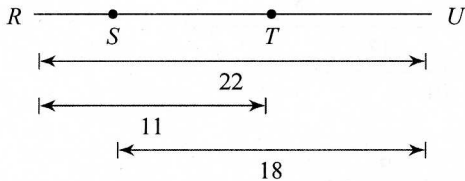
33) Find IK



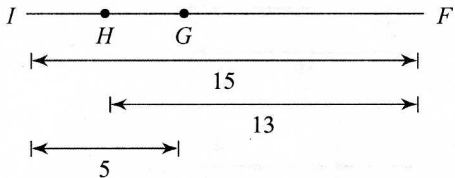
35) Find BD



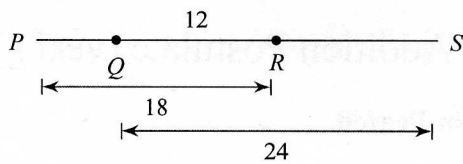
37) Find ST



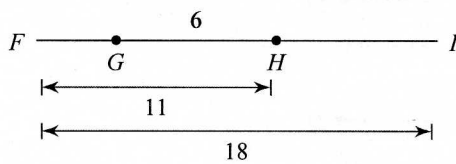
39) Find HG



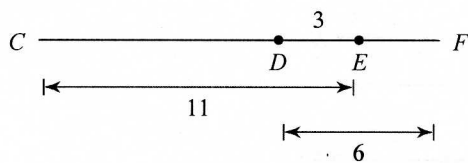
24) Find PS



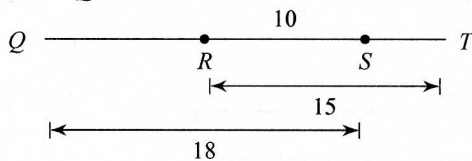
26) Find GI



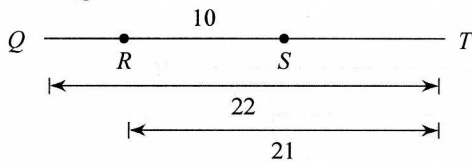
28) Find CF



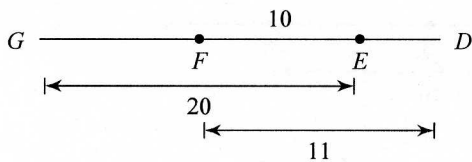
30) Find QT



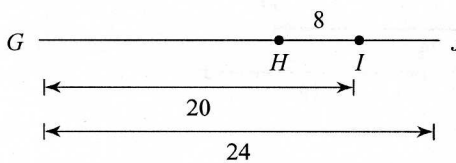
32) Find QS



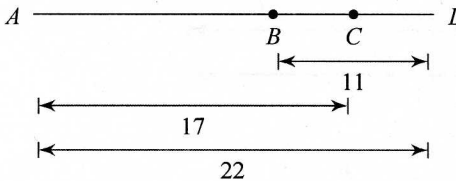
34) Find GD



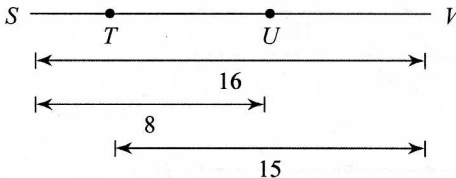
36) Find HJ



38) Find BC



40) Find TU



Answers to 6-1 Segment Addition Postulate (ver1)_hw

- 1) 4
- 2) 7
- 3) 12
- 4) 3
- 5) 6
- 6) 12
- 7) 8
- 8) 11
- 9) 9
- 10) 11
- 11) 14
- 12) 19
- 13) 13
- 14) 4
- 15) 28
- 16) 28
- 17) 8
- 18) 4
- 19) 13
- 20) 19
- 21) 16
- 22) 9
- 23) 20
- 24) 30
- 25) 20
- 26) 13
- 27) 31
- 28) 14
- 29) 19
- 30) 23
- 31) 22
- 32) 11
- 33) 11
- 34) 21
- 35) 15
- 36) 12
- 37) 7
- 38) 6
- 39) 3
- 40) 7